



Student: _____


Chess Math


Key


 = ?

 = 9

 = 5

 = 3

 = 3

 = 1








































Players sometimes count their captured pieces to see who is winning. For example, **one Queen** is worth **nine Pawns** (points).

A **Queen** is worth: a Rook (5)
+ a Knight (3)
+ a Pawn (1) or (5 + 3 + 1 = 9)

What are **Kings** worth? Everything and nothing!

Of course the position on the board is also important. A **Pawn** about to turn into a **Queen** is worth more than a **Knight** trapped in a corner.

Try the Chess Math problems for practice.

  +  ----- 9	 +  +  -----	 +  +  -----	     +  -----	     +  -----	 -  -----	   +  -----	     +  -----	     +  -----
--	---	---	--	--	--	--	--	--

or...

Add and write the points in the boxes for each group of pieces. Which group has the most points?

W



B

David Donaldson teaches Chess

chess@davidDonaldson.com

source: davidDonaldson.com/pdfs/